

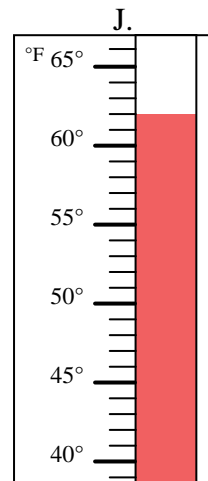
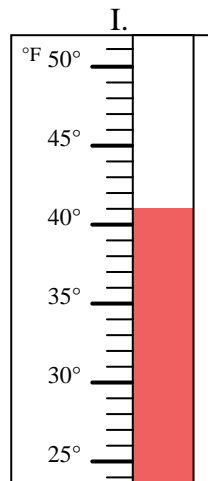
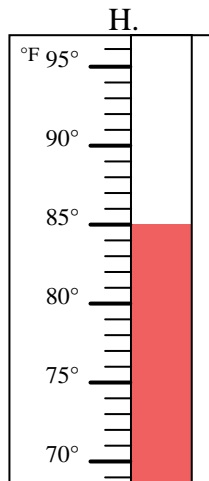
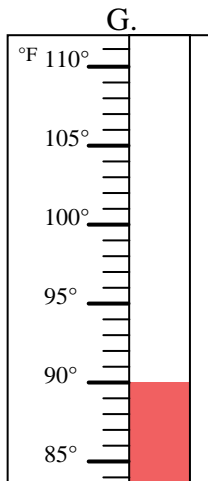
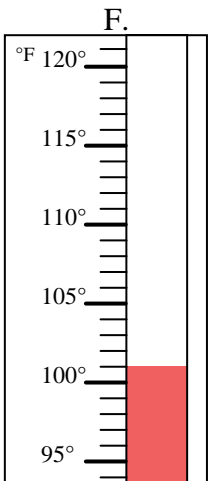
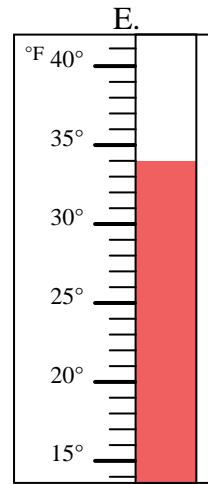
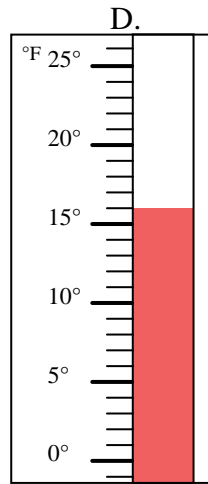
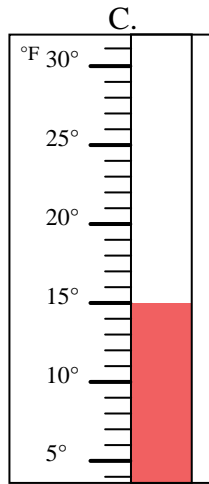
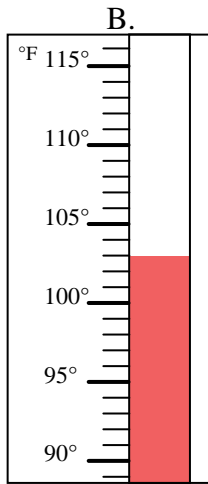
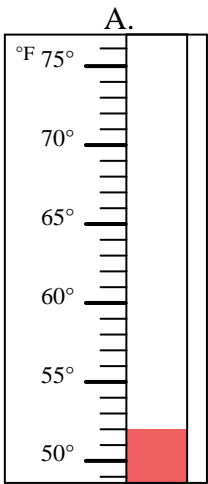


Determine which letter best answers each question.

Answers

- 1) Which thermometer best represents the temperature 15°? _____
- 2) Which thermometer best represents the temperature 90°? _____
- 3) Which thermometer best represents the temperature 62°? _____
- 4) Which thermometer best represents the temperature 34°? _____
- 5) Which thermometer best represents the temperature 16°? _____
- 6) Which thermometer best represents the temperature 41°? _____
- 7) Which thermometer best represents the temperature 85°? _____
- 8) Which thermometer best represents the temperature 52°? _____
- 9) Which thermometer best represents the temperature 103°? _____
- 10) Which thermometer best represents the temperature 101°? _____

1. _____
2. _____
3. _____
4. _____
5. _____
6. _____
7. _____
8. _____
9. _____
10. _____



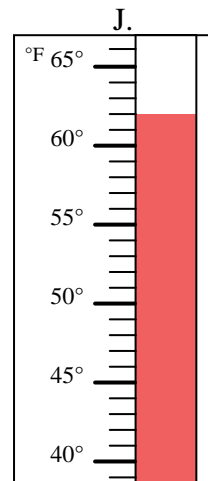
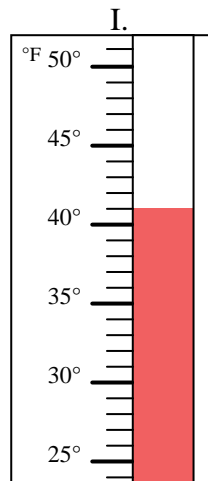
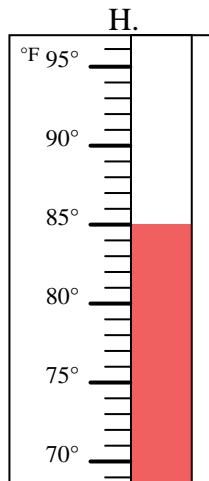
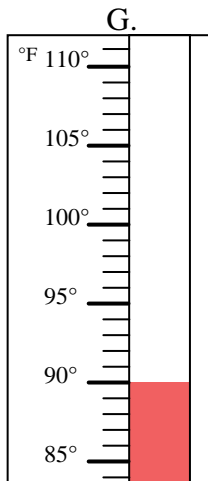
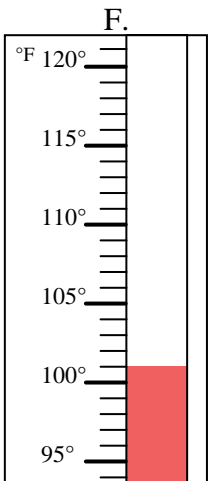
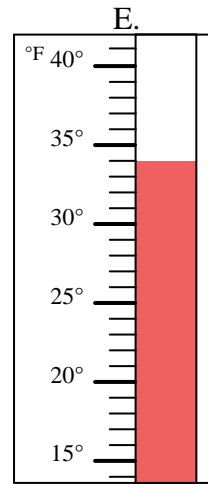
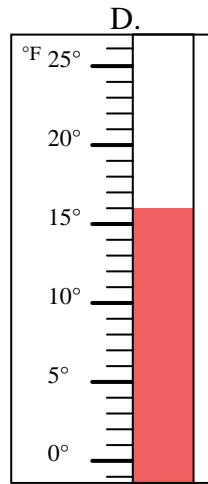
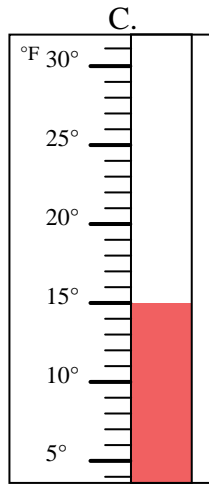
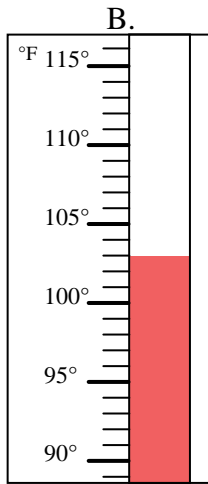
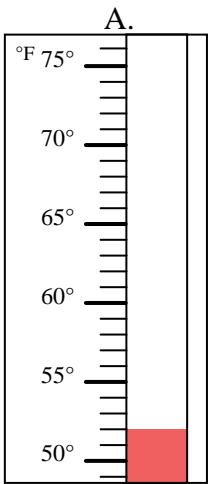


Determine which letter best answers each question.

- 1) Which thermometer best represents the temperature 15°? C
- 2) Which thermometer best represents the temperature 90°? G
- 3) Which thermometer best represents the temperature 62°? J
- 4) Which thermometer best represents the temperature 34°? E
- 5) Which thermometer best represents the temperature 16°? D
- 6) Which thermometer best represents the temperature 41°? I
- 7) Which thermometer best represents the temperature 85°? H
- 8) Which thermometer best represents the temperature 52°? A
- 9) Which thermometer best represents the temperature 103°? B
- 10) Which thermometer best represents the temperature 101°? F

Answers

- 1. C
- 2. G
- 3. J
- 4. E
- 5. D
- 6. I
- 7. H
- 8. A
- 9. B
- 10. F



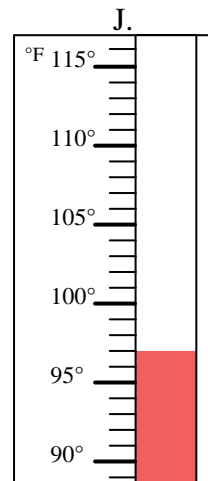
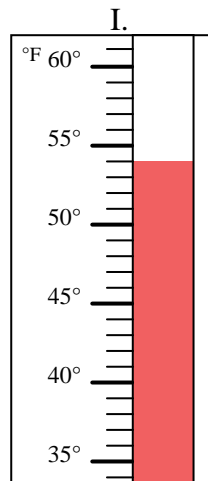
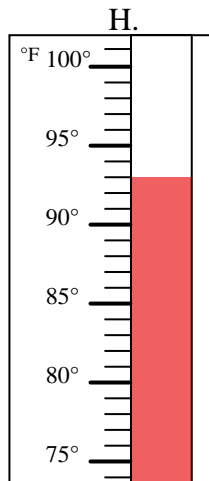
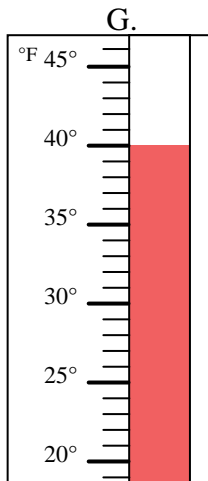
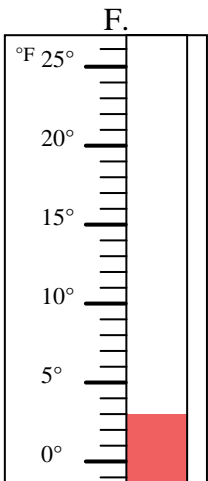
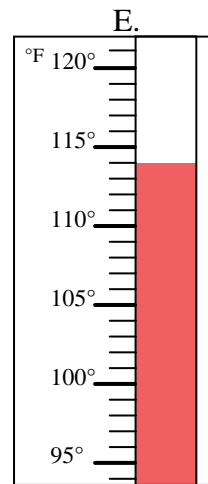
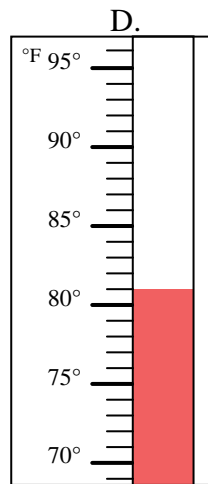
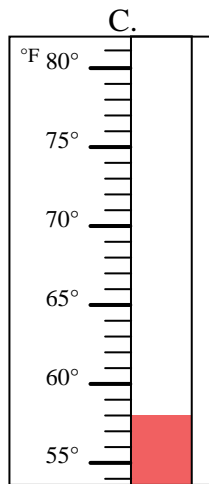
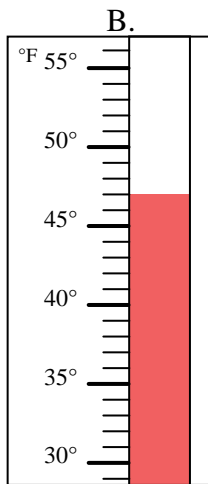
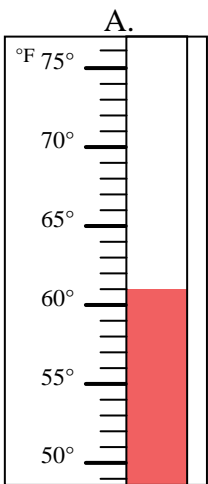


Determine which letter best answers each question.

Answers

- 1) Which thermometer best represents the temperature 114°? _____
- 2) Which thermometer best represents the temperature 61°? _____
- 3) Which thermometer best represents the temperature 58°? _____
- 4) Which thermometer best represents the temperature 3°? _____
- 5) Which thermometer best represents the temperature 81°? _____
- 6) Which thermometer best represents the temperature 47°? _____
- 7) Which thermometer best represents the temperature 93°? _____
- 8) Which thermometer best represents the temperature 54°? _____
- 9) Which thermometer best represents the temperature 97°? _____
- 10) Which thermometer best represents the temperature 40°? _____

1. _____
2. _____
3. _____
4. _____
5. _____
6. _____
7. _____
8. _____
9. _____
10. _____



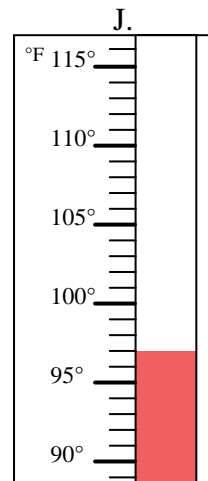
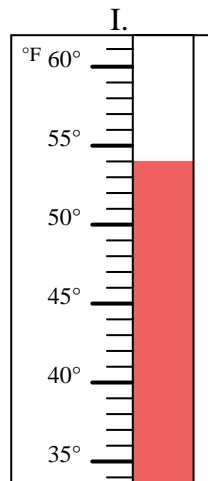
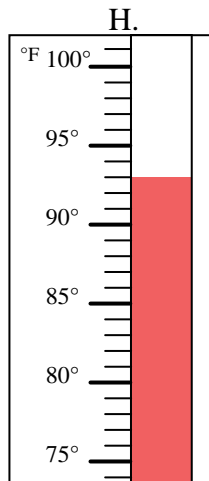
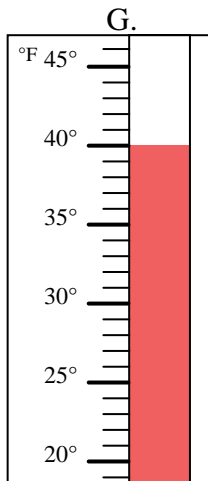
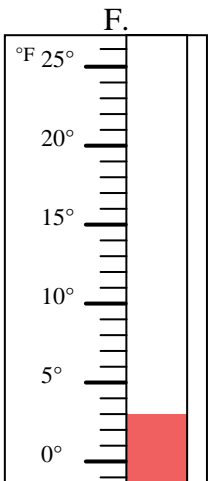
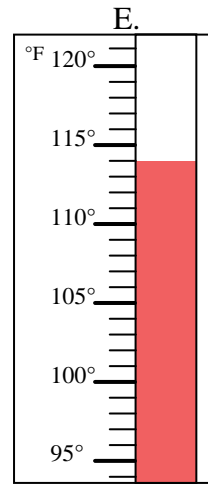
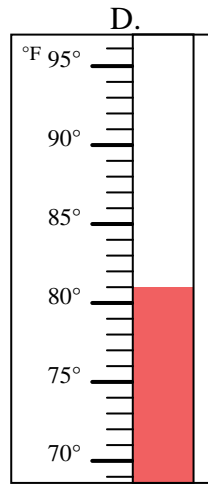
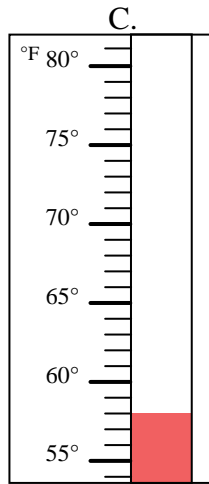
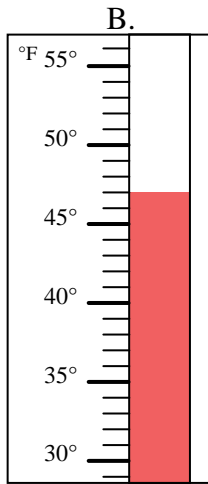
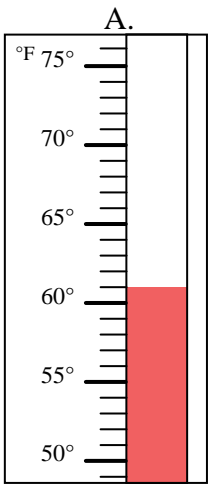


Determine which letter best answers each question.

- 1) Which thermometer best represents the temperature 114°? E
- 2) Which thermometer best represents the temperature 61°? A
- 3) Which thermometer best represents the temperature 58°? C
- 4) Which thermometer best represents the temperature 3°? F
- 5) Which thermometer best represents the temperature 81°? D
- 6) Which thermometer best represents the temperature 47°? B
- 7) Which thermometer best represents the temperature 93°? H
- 8) Which thermometer best represents the temperature 54°? I
- 9) Which thermometer best represents the temperature 97°? J
- 10) Which thermometer best represents the temperature 40°? G

Answers

1. E
2. A
3. C
4. F
5. D
6. B
7. H
8. I
9. J
10. G



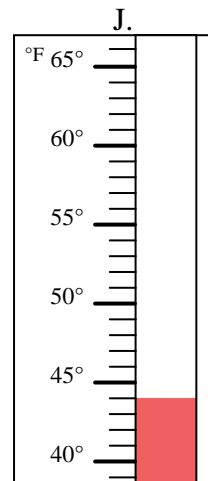
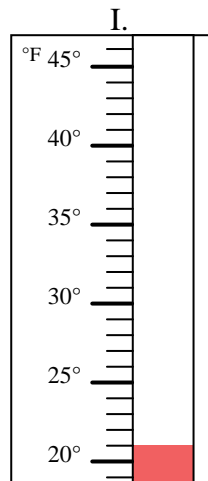
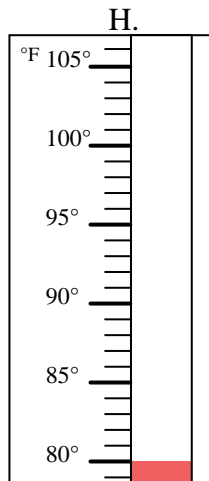
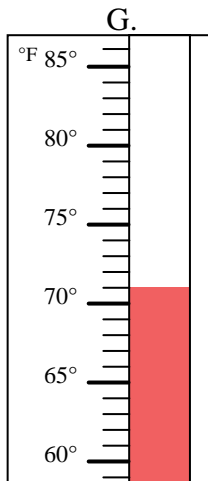
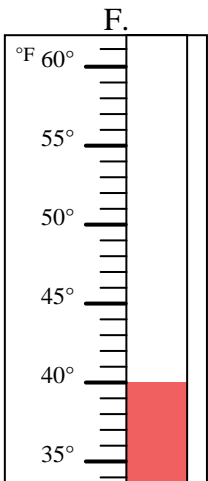
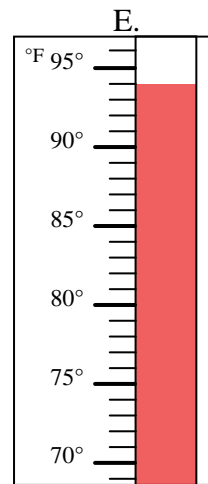
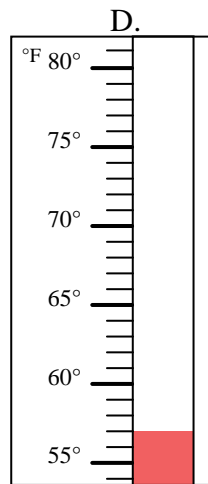
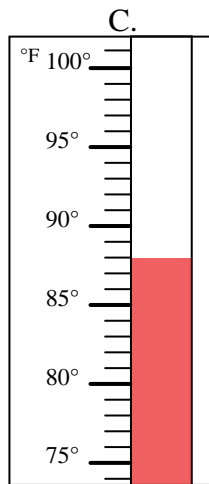
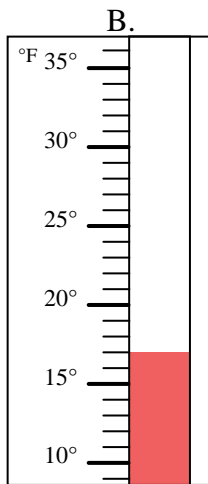
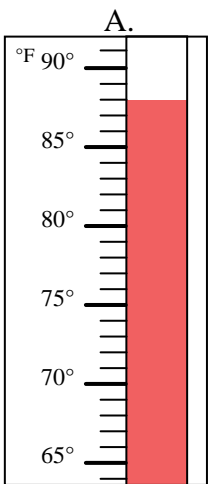


Determine which letter best answers each question.

Answers

- 1) Which thermometer best represents the temperature 17°? _____
- 2) Which thermometer best represents the temperature 57°? _____
- 3) Which thermometer best represents the temperature 80°? _____
- 4) Which thermometer best represents the temperature 44°? _____
- 5) Which thermometer best represents the temperature 94°? _____
- 6) Which thermometer best represents the temperature 40°? _____
- 7) Which thermometer best represents the temperature 88°? _____
- 8) Which thermometer best represents the temperature 88°? _____
- 9) Which thermometer best represents the temperature 21°? _____
- 10) Which thermometer best represents the temperature 71°? _____

1. _____
2. _____
3. _____
4. _____
5. _____
6. _____
7. _____
8. _____
9. _____
10. _____



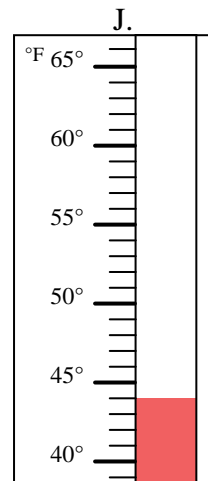
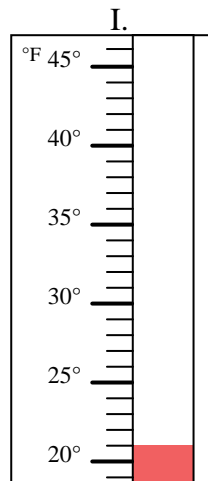
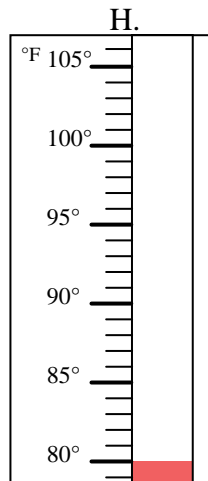
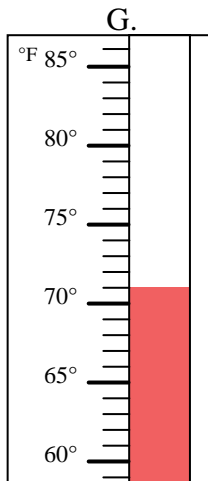
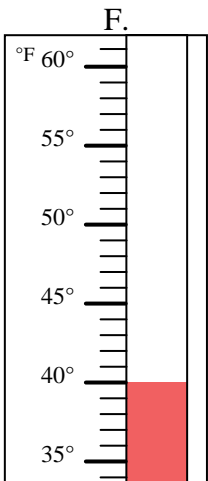
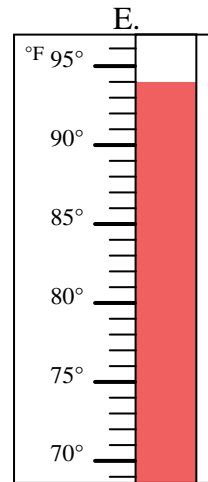
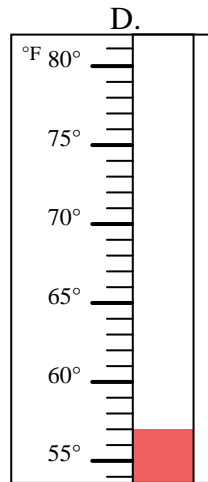
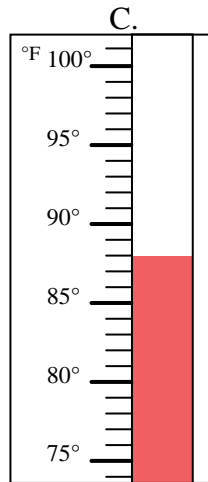
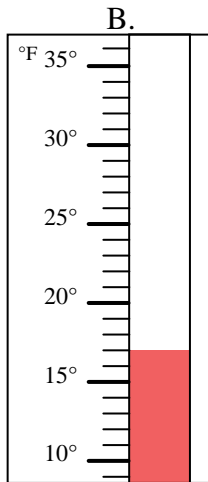
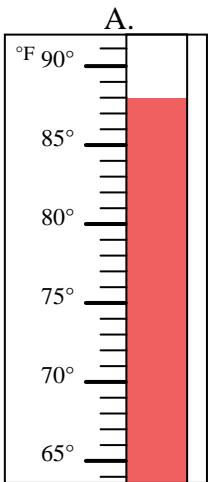


Determine which letter best answers each question.

- 1) Which thermometer best represents the temperature 17°? B
- 2) Which thermometer best represents the temperature 57°? D
- 3) Which thermometer best represents the temperature 80°? H
- 4) Which thermometer best represents the temperature 44°? J
- 5) Which thermometer best represents the temperature 94°? E
- 6) Which thermometer best represents the temperature 40°? F
- 7) Which thermometer best represents the temperature 88°? A
- 8) Which thermometer best represents the temperature 88°? C
- 9) Which thermometer best represents the temperature 21°? I
- 10) Which thermometer best represents the temperature 71°? G

Answers

- 1. B
- 2. D
- 3. H
- 4. J
- 5. E
- 6. F
- 7. A
- 8. C
- 9. I
- 10. G



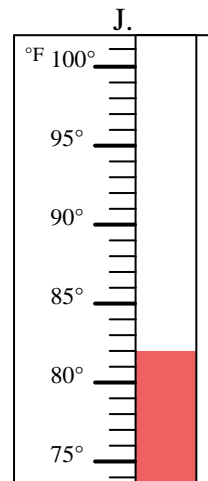
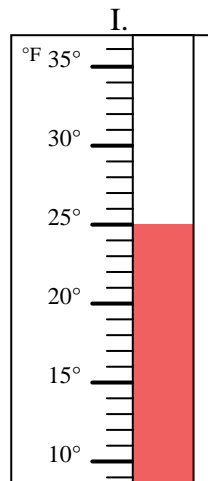
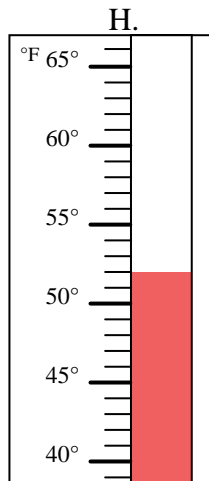
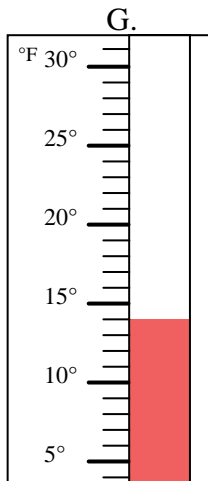
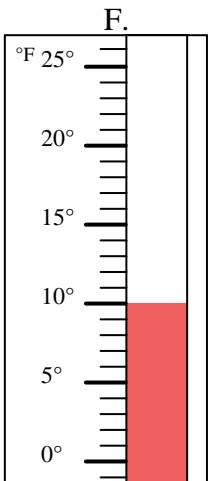
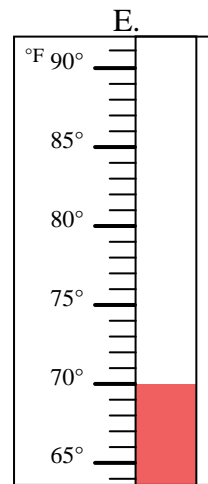
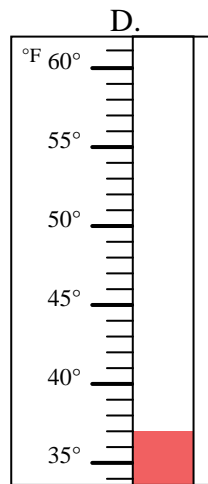
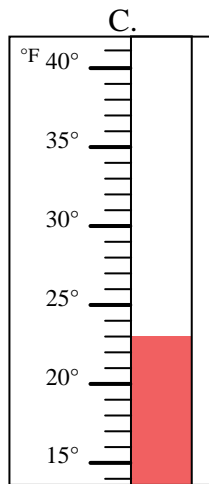
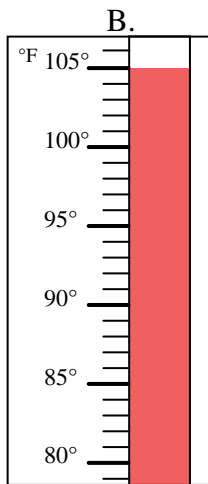
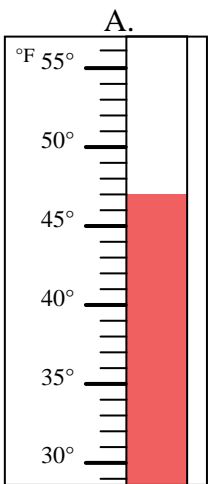


Determine which letter best answers each question.

Answers

- 1) Which thermometer best represents the temperature 37°? _____
- 2) Which thermometer best represents the temperature 14°? _____
- 3) Which thermometer best represents the temperature 70°? _____
- 4) Which thermometer best represents the temperature 23°? _____
- 5) Which thermometer best represents the temperature 47°? _____
- 6) Which thermometer best represents the temperature 25°? _____
- 7) Which thermometer best represents the temperature 82°? _____
- 8) Which thermometer best represents the temperature 52°? _____
- 9) Which thermometer best represents the temperature 105°? _____
- 10) Which thermometer best represents the temperature 10°? _____

1. _____
2. _____
3. _____
4. _____
5. _____
6. _____
7. _____
8. _____
9. _____
10. _____



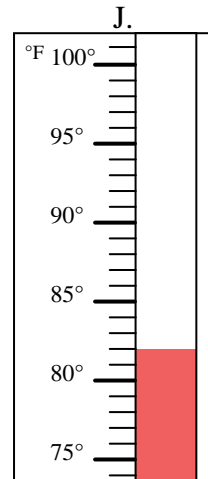
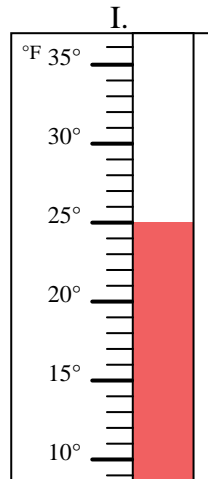
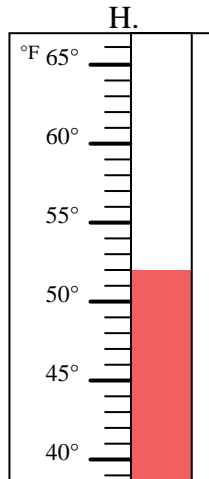
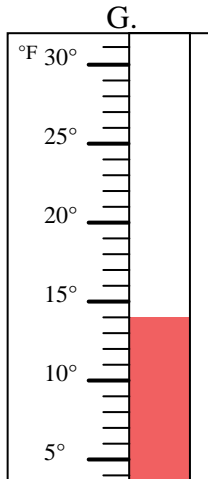
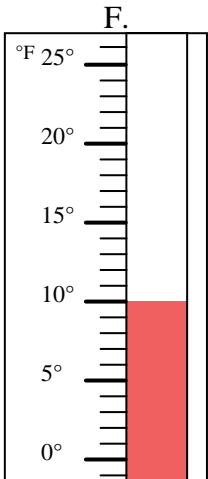
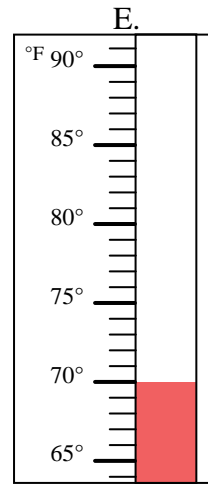
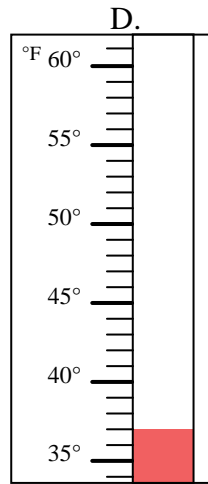
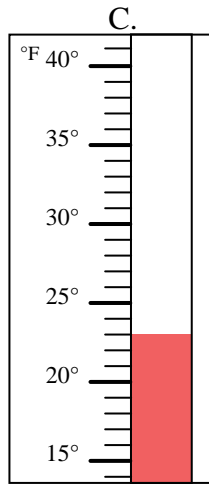
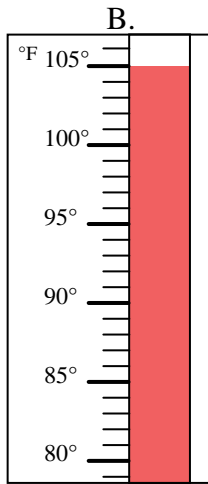
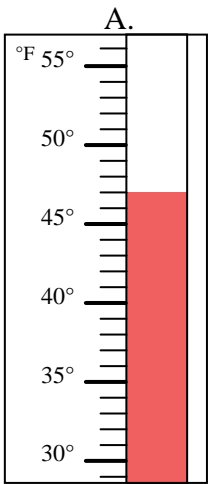


Determine which letter best answers each question.

- 1) Which thermometer best represents the temperature 37°? D
- 2) Which thermometer best represents the temperature 14°? G
- 3) Which thermometer best represents the temperature 70°? E
- 4) Which thermometer best represents the temperature 23°? C
- 5) Which thermometer best represents the temperature 47°? A
- 6) Which thermometer best represents the temperature 25°? I
- 7) Which thermometer best represents the temperature 82°? J
- 8) Which thermometer best represents the temperature 52°? H
- 9) Which thermometer best represents the temperature 105°? B
- 10) Which thermometer best represents the temperature 10°? F

Answers

1. D
2. G
3. E
4. C
5. A
6. I
7. J
8. H
9. B
10. F



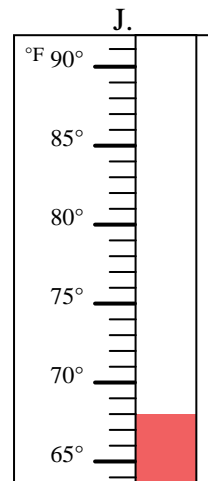
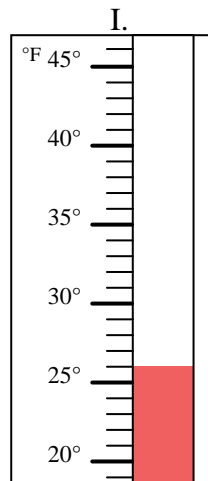
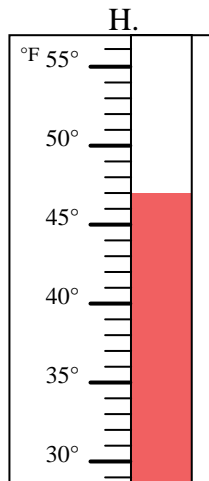
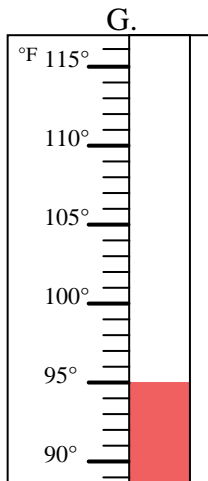
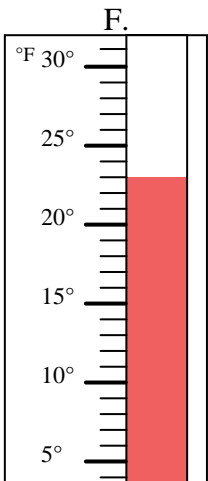
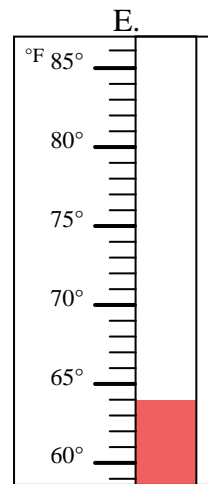
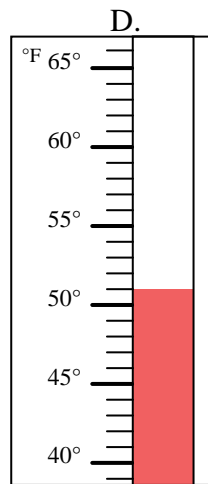
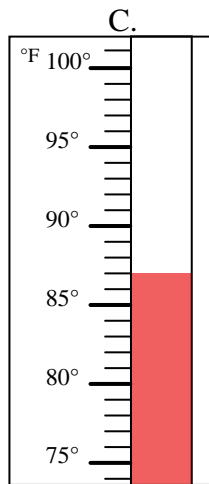
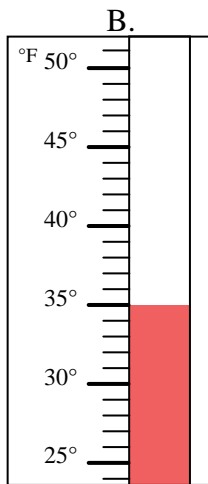
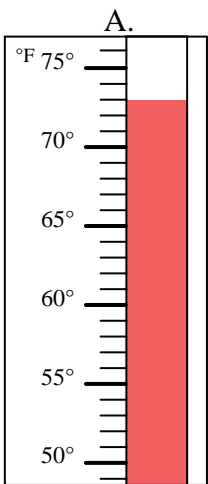


Determine which letter best answers each question.

Answers

- 1) Which thermometer best represents the temperature 64°? _____
- 2) Which thermometer best represents the temperature 47°? _____
- 3) Which thermometer best represents the temperature 95°? _____
- 4) Which thermometer best represents the temperature 26°? _____
- 5) Which thermometer best represents the temperature 23°? _____
- 6) Which thermometer best represents the temperature 73°? _____
- 7) Which thermometer best represents the temperature 51°? _____
- 8) Which thermometer best represents the temperature 35°? _____
- 9) Which thermometer best represents the temperature 68°? _____
- 10) Which thermometer best represents the temperature 87°? _____

1. _____
2. _____
3. _____
4. _____
5. _____
6. _____
7. _____
8. _____
9. _____
10. _____



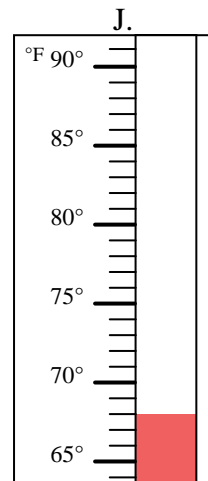
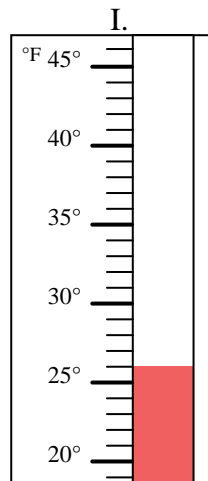
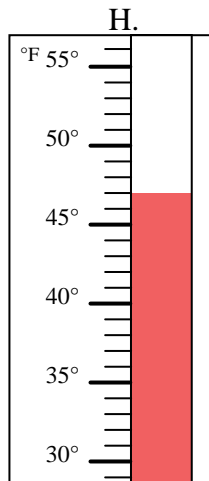
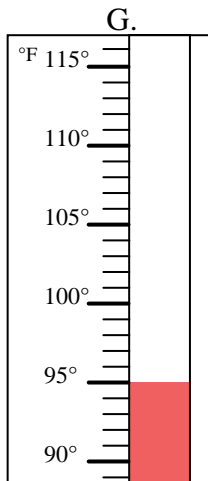
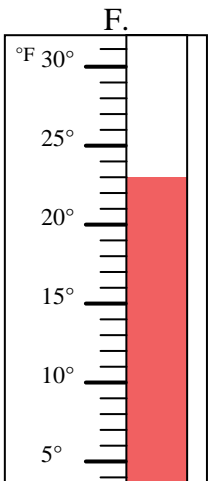
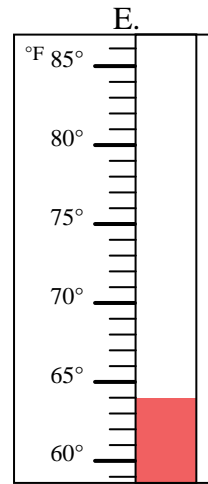
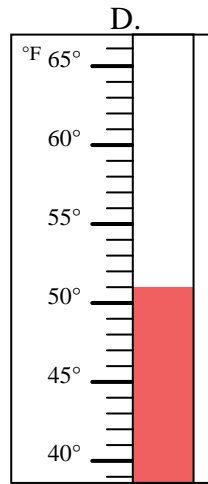
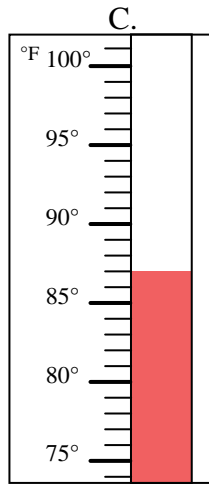
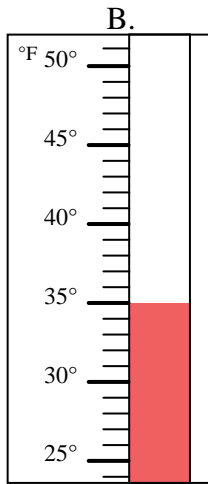
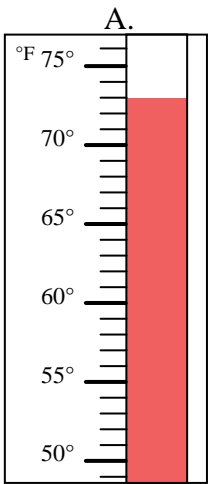


Determine which letter best answers each question.

- 1) Which thermometer best represents the temperature 64°? E
- 2) Which thermometer best represents the temperature 47°? H
- 3) Which thermometer best represents the temperature 95°? G
- 4) Which thermometer best represents the temperature 26°? I
- 5) Which thermometer best represents the temperature 23°? F
- 6) Which thermometer best represents the temperature 73°? A
- 7) Which thermometer best represents the temperature 51°? D
- 8) Which thermometer best represents the temperature 35°? B
- 9) Which thermometer best represents the temperature 68°? J
- 10) Which thermometer best represents the temperature 87°? C

Answers

1. E
2. H
3. G
4. I
5. F
6. A
7. D
8. B
9. J
10. C



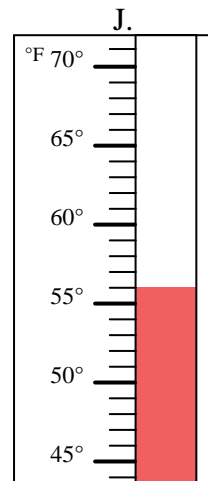
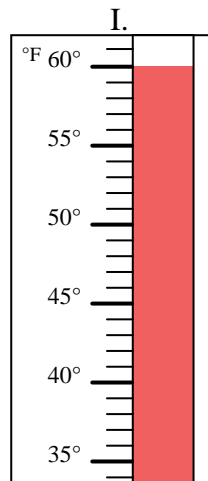
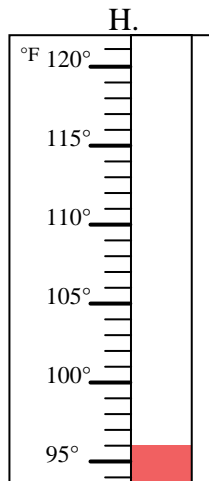
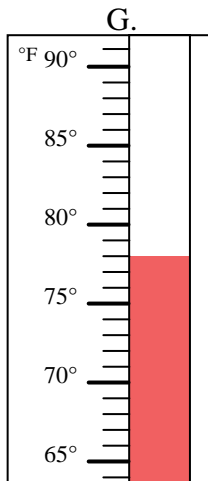
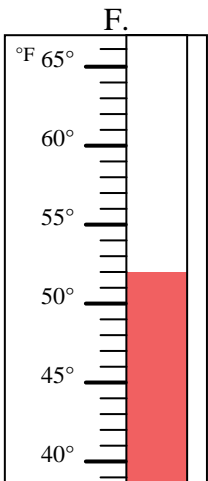
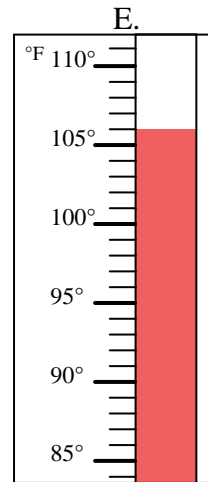
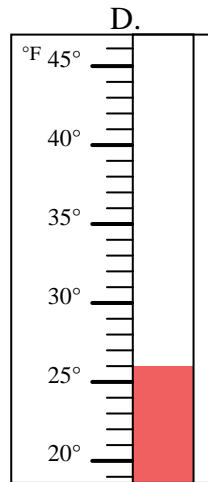
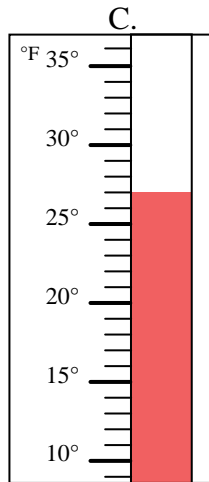
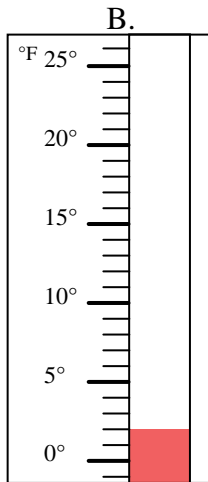
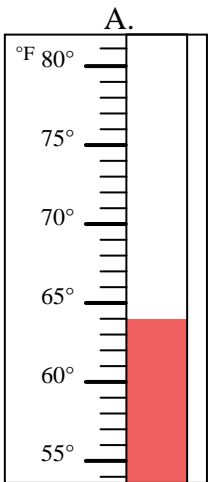


Determine which letter best answers each question.

Answers

- 1) Which thermometer best represents the temperature 52°? _____
- 2) Which thermometer best represents the temperature 78°? _____
- 3) Which thermometer best represents the temperature 26°? _____
- 4) Which thermometer best represents the temperature 2°? _____
- 5) Which thermometer best represents the temperature 60°? _____
- 6) Which thermometer best represents the temperature 96°? _____
- 7) Which thermometer best represents the temperature 27°? _____
- 8) Which thermometer best represents the temperature 64°? _____
- 9) Which thermometer best represents the temperature 106°? _____
- 10) Which thermometer best represents the temperature 56°? _____

1. _____
2. _____
3. _____
4. _____
5. _____
6. _____
7. _____
8. _____
9. _____
10. _____



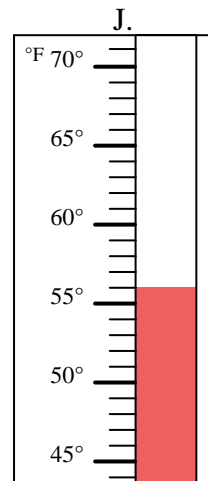
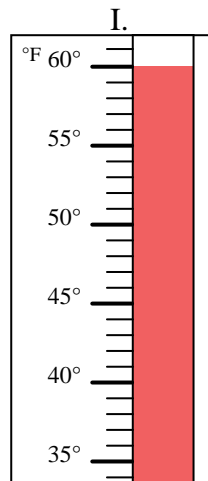
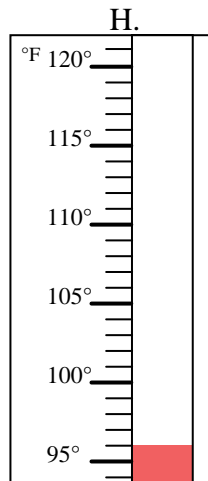
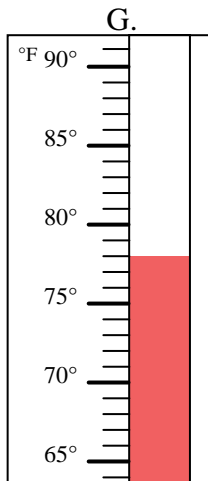
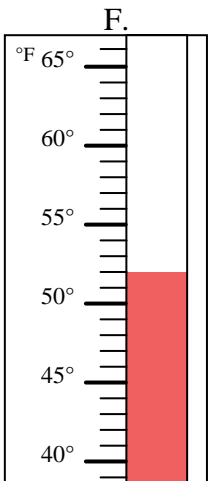
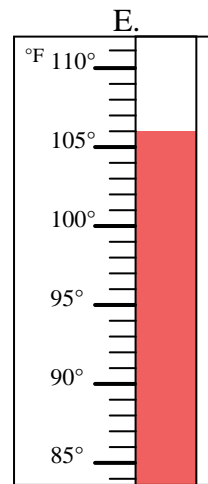
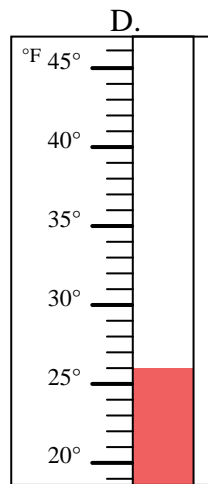
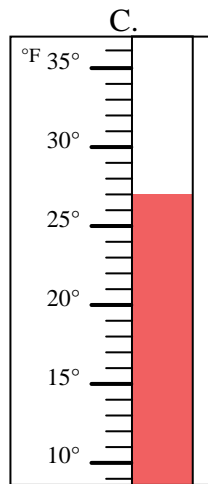
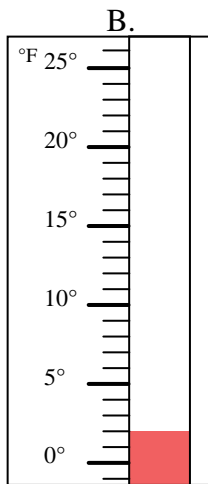
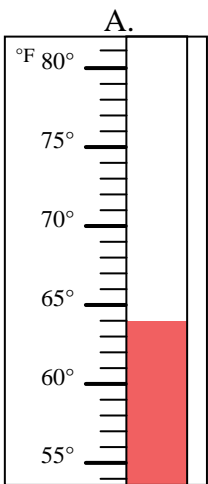


Determine which letter best answers each question.

- 1) Which thermometer best represents the temperature 52°? **F**
- 2) Which thermometer best represents the temperature 78°? **G**
- 3) Which thermometer best represents the temperature 26°? **D**
- 4) Which thermometer best represents the temperature 2°? **B**
- 5) Which thermometer best represents the temperature 60°? **I**
- 6) Which thermometer best represents the temperature 96°? **H**
- 7) Which thermometer best represents the temperature 27°? **C**
- 8) Which thermometer best represents the temperature 64°? **A**
- 9) Which thermometer best represents the temperature 106°? **E**
- 10) Which thermometer best represents the temperature 56°? **J**

Answers

- 1. **F**
- 2. **G**
- 3. **D**
- 4. **B**
- 5. **I**
- 6. **H**
- 7. **C**
- 8. **A**
- 9. **E**
- 10. **J**



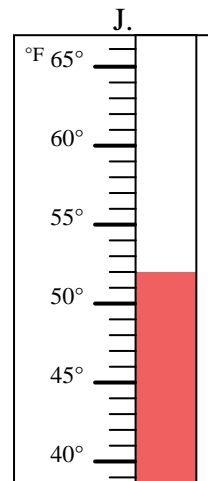
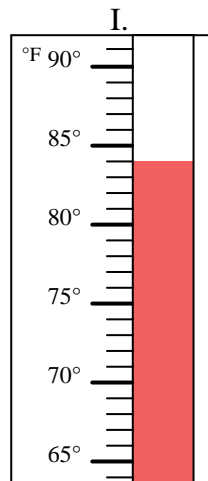
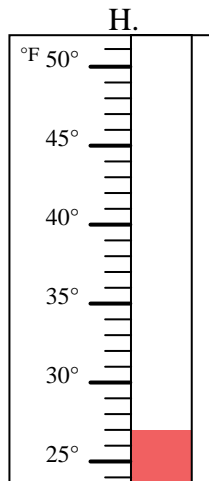
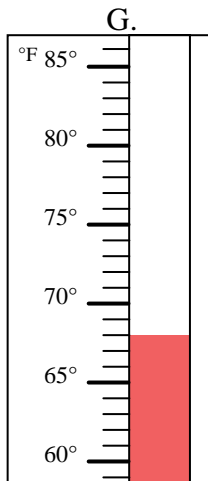
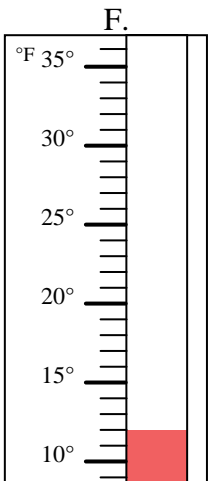
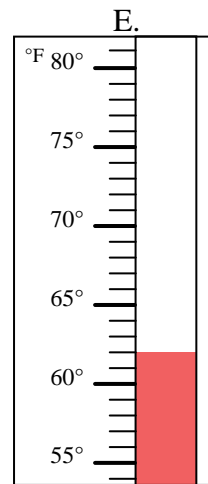
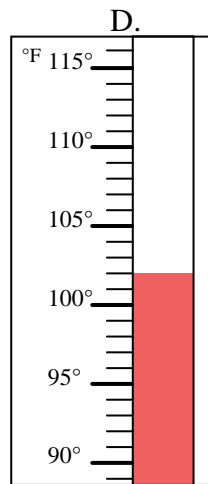
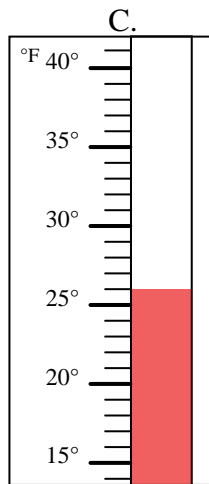
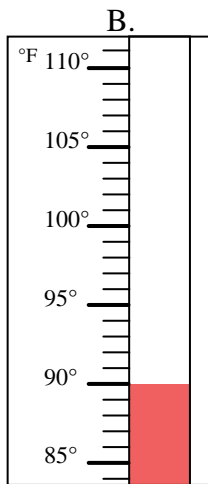
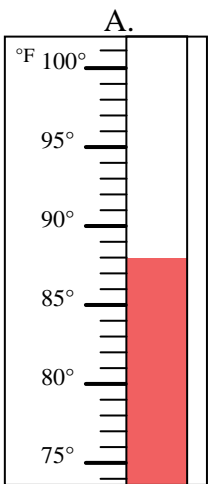


Determine which letter best answers each question.

Answers

- 1) Which thermometer best represents the temperature 68°? _____
- 2) Which thermometer best represents the temperature 90°? _____
- 3) Which thermometer best represents the temperature 52°? _____
- 4) Which thermometer best represents the temperature 84°? _____
- 5) Which thermometer best represents the temperature 88°? _____
- 6) Which thermometer best represents the temperature 62°? _____
- 7) Which thermometer best represents the temperature 26°? _____
- 8) Which thermometer best represents the temperature 102°? _____
- 9) Which thermometer best represents the temperature 12°? _____
- 10) Which thermometer best represents the temperature 27°? _____

1. _____
2. _____
3. _____
4. _____
5. _____
6. _____
7. _____
8. _____
9. _____
10. _____



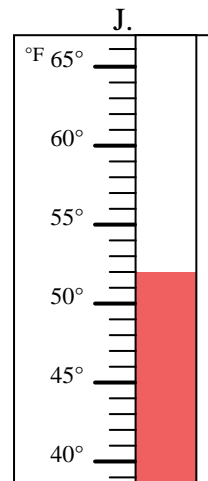
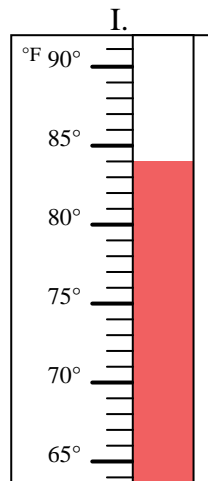
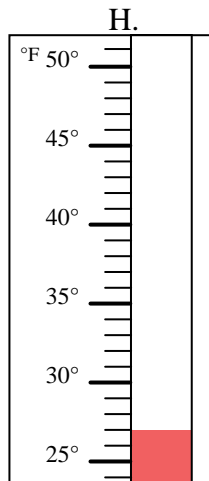
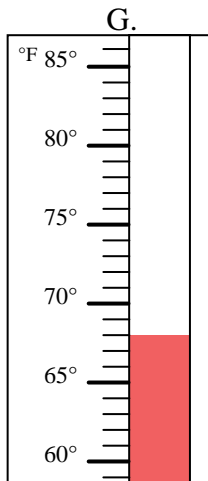
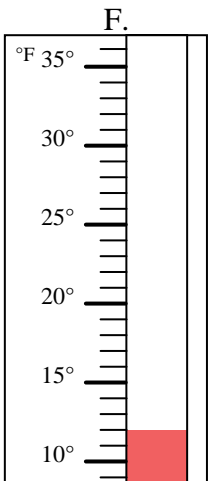
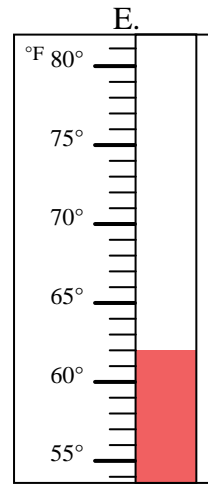
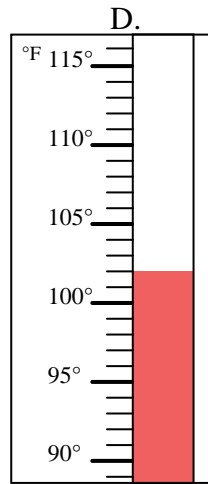
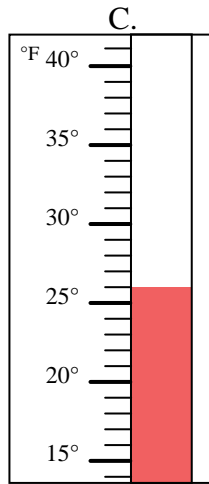
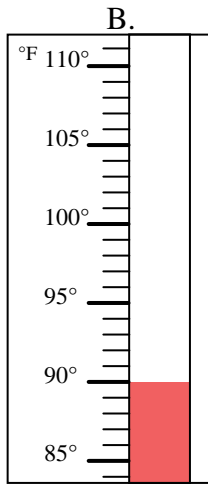
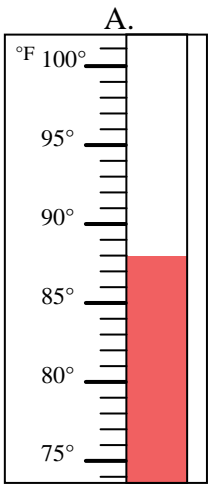


Determine which letter best answers each question.

- 1) Which thermometer best represents the temperature 68°? **G**
- 2) Which thermometer best represents the temperature 90°? **B**
- 3) Which thermometer best represents the temperature 52°? **J**
- 4) Which thermometer best represents the temperature 84°? **I**
- 5) Which thermometer best represents the temperature 88°? **A**
- 6) Which thermometer best represents the temperature 62°? **E**
- 7) Which thermometer best represents the temperature 26°? **C**
- 8) Which thermometer best represents the temperature 102°? **D**
- 9) Which thermometer best represents the temperature 12°? **F**
- 10) Which thermometer best represents the temperature 27°? **H**

Answers

1. **G**
2. **B**
3. **J**
4. **I**
5. **A**
6. **E**
7. **C**
8. **D**
9. **F**
10. **H**



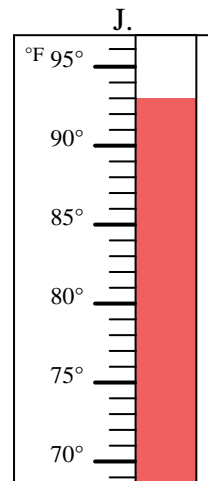
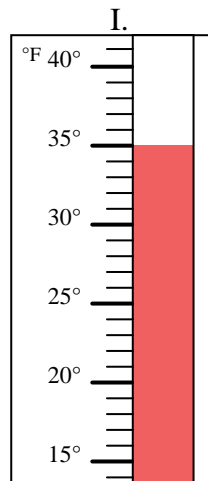
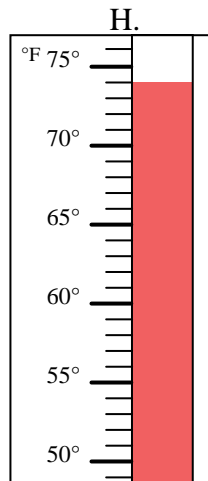
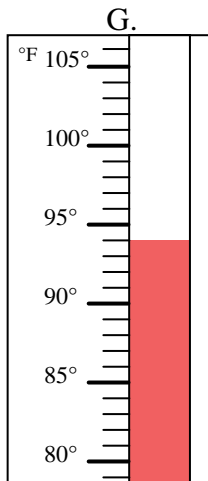
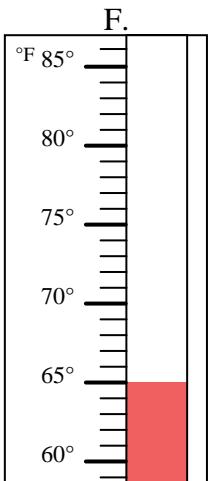
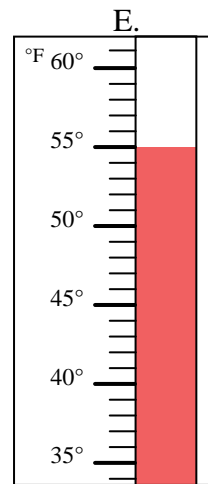
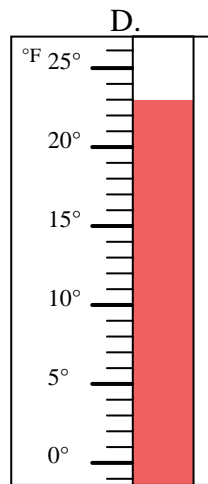
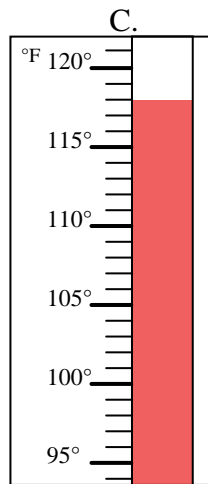
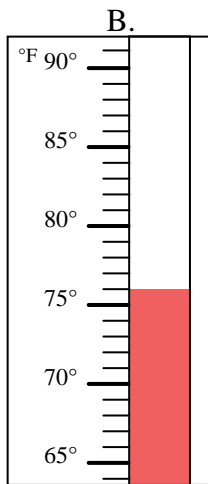
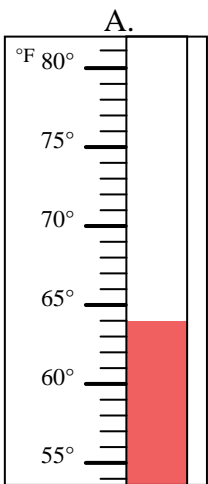


Determine which letter best answers each question.

Answers

- 1) Which thermometer best represents the temperature 94°? _____
- 2) Which thermometer best represents the temperature 23°? _____
- 3) Which thermometer best represents the temperature 35°? _____
- 4) Which thermometer best represents the temperature 55°? _____
- 5) Which thermometer best represents the temperature 93°? _____
- 6) Which thermometer best represents the temperature 65°? _____
- 7) Which thermometer best represents the temperature 118°? _____
- 8) Which thermometer best represents the temperature 64°? _____
- 9) Which thermometer best represents the temperature 76°? _____
- 10) Which thermometer best represents the temperature 74°? _____

1. _____
2. _____
3. _____
4. _____
5. _____
6. _____
7. _____
8. _____
9. _____
10. _____



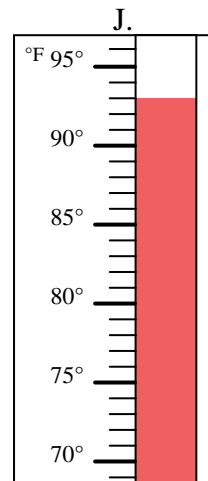
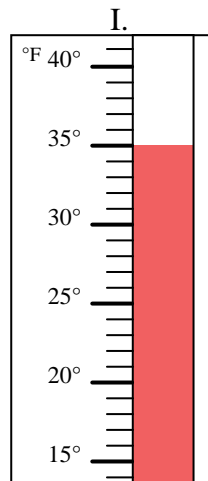
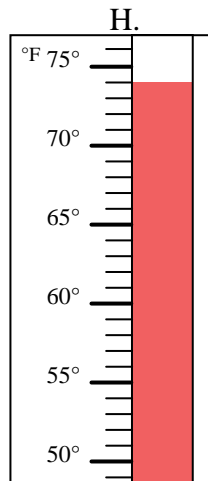
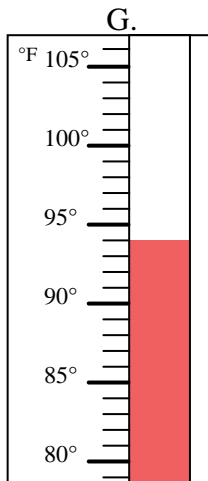
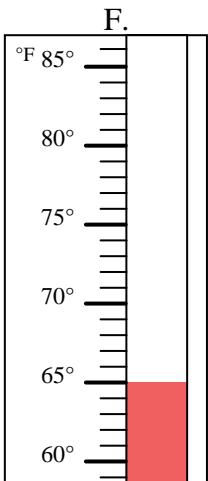
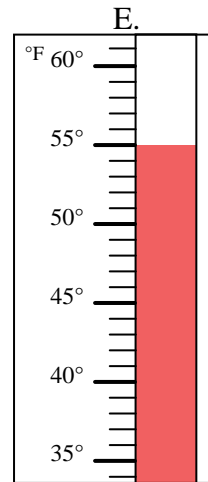
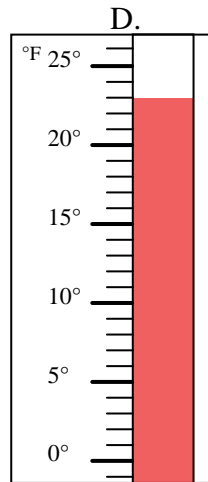
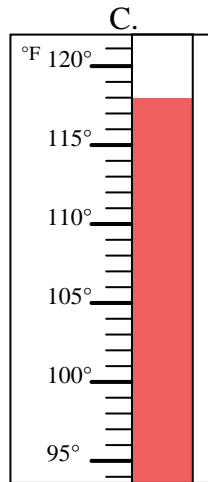
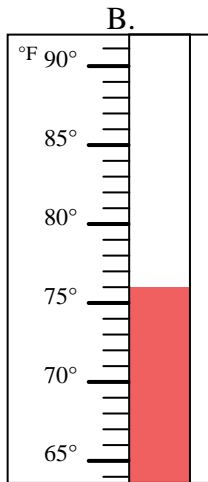
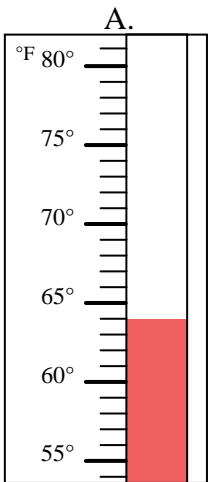


Determine which letter best answers each question.

- 1) Which thermometer best represents the temperature 94°? **G**
- 2) Which thermometer best represents the temperature 23°? **D**
- 3) Which thermometer best represents the temperature 35°? **I**
- 4) Which thermometer best represents the temperature 55°? **E**
- 5) Which thermometer best represents the temperature 93°? **J**
- 6) Which thermometer best represents the temperature 65°? **F**
- 7) Which thermometer best represents the temperature 118°? **C**
- 8) Which thermometer best represents the temperature 64°? **A**
- 9) Which thermometer best represents the temperature 76°? **B**
- 10) Which thermometer best represents the temperature 74°? **H**

Answers

1. **G**
2. **D**
3. **I**
4. **E**
5. **J**
6. **F**
7. **C**
8. **A**
9. **B**
10. **H**



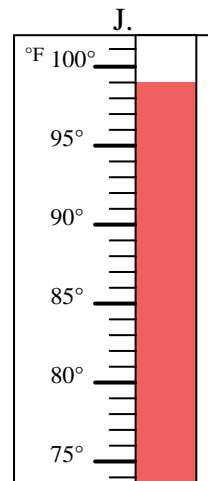
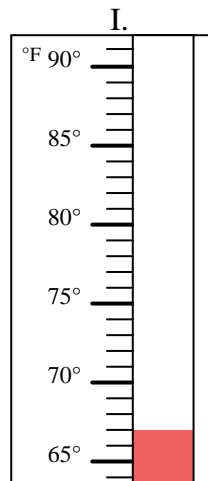
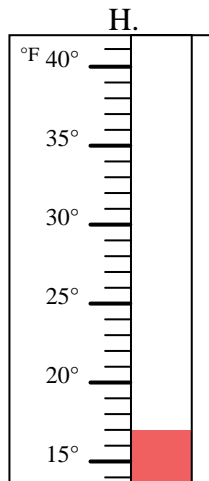
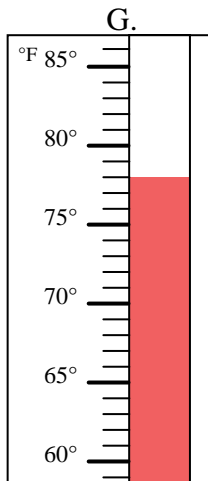
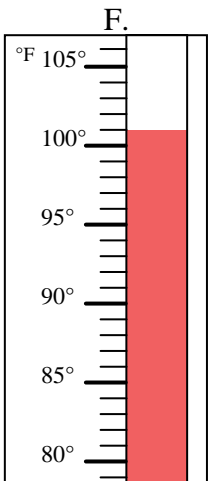
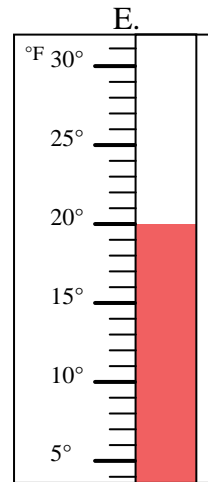
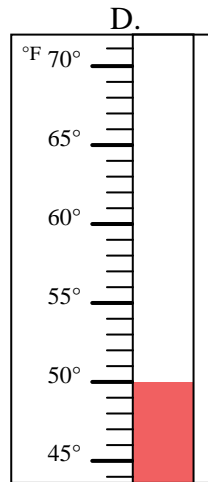
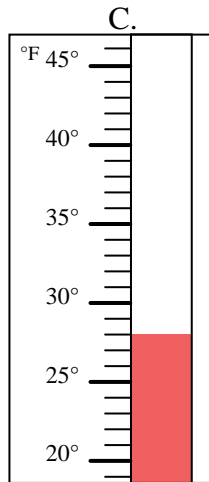
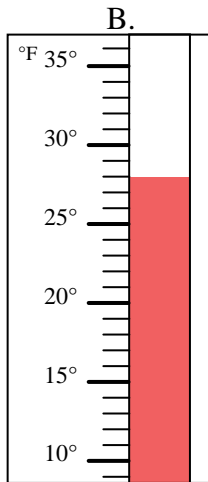
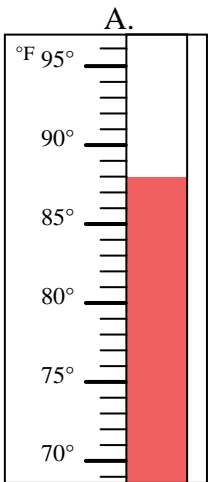


Determine which letter best answers each question.

Answers

- 1) Which thermometer best represents the temperature 67°? _____
- 2) Which thermometer best represents the temperature 20°? _____
- 3) Which thermometer best represents the temperature 99°? _____
- 4) Which thermometer best represents the temperature 28°? _____
- 5) Which thermometer best represents the temperature 88°? _____
- 6) Which thermometer best represents the temperature 78°? _____
- 7) Which thermometer best represents the temperature 28°? _____
- 8) Which thermometer best represents the temperature 50°? _____
- 9) Which thermometer best represents the temperature 101°? _____
- 10) Which thermometer best represents the temperature 17°? _____

1. _____
2. _____
3. _____
4. _____
5. _____
6. _____
7. _____
8. _____
9. _____
10. _____



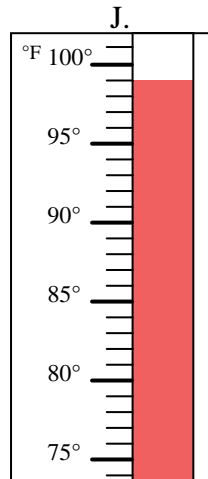
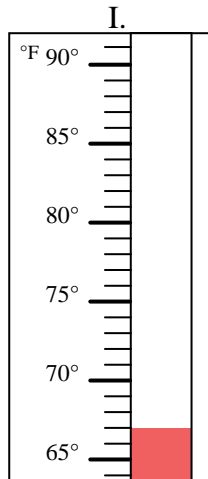
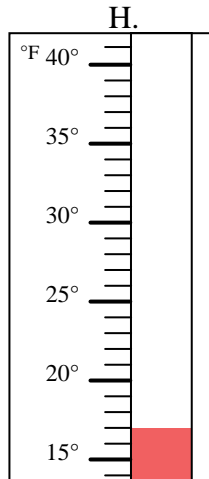
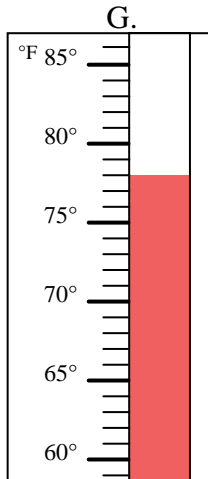
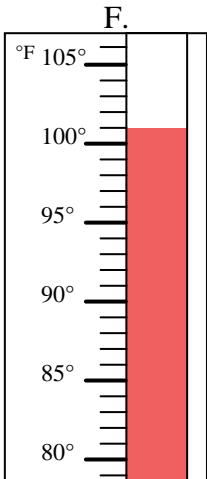
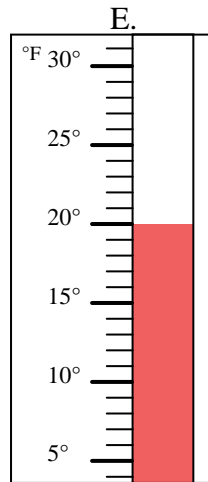
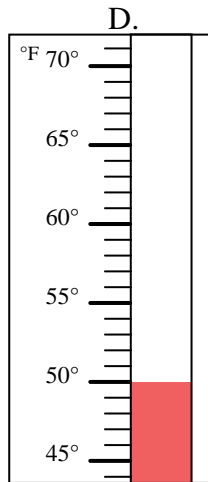
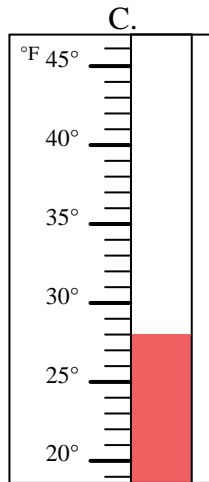
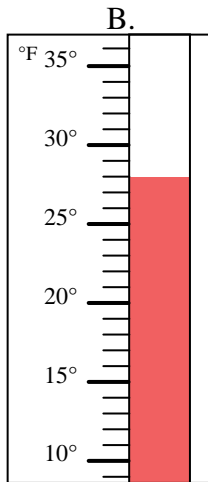
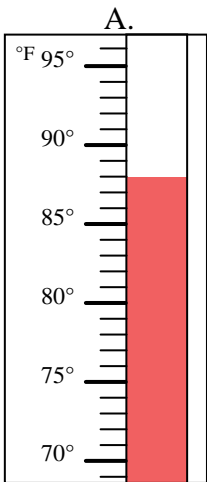


Determine which letter best answers each question.

- 1) Which thermometer best represents the temperature 67°? I
- 2) Which thermometer best represents the temperature 20°? E
- 3) Which thermometer best represents the temperature 99°? J
- 4) Which thermometer best represents the temperature 28°? C
- 5) Which thermometer best represents the temperature 88°? A
- 6) Which thermometer best represents the temperature 78°? G
- 7) Which thermometer best represents the temperature 28°? B
- 8) Which thermometer best represents the temperature 50°? D
- 9) Which thermometer best represents the temperature 101°? F
- 10) Which thermometer best represents the temperature 17°? H

Answers

1. I
2. E
3. J
4. C
5. A
6. G
7. B
8. D
9. F
10. H



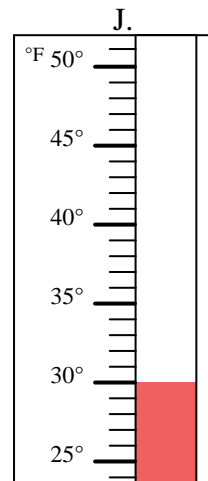
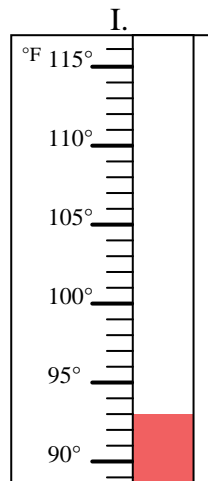
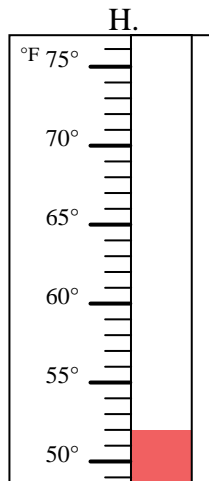
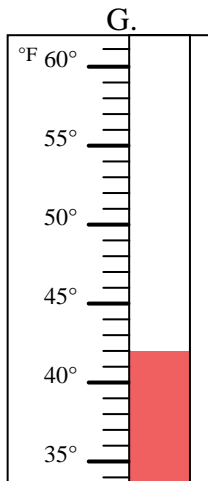
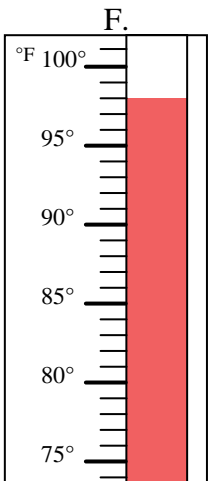
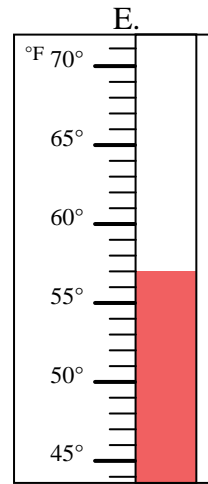
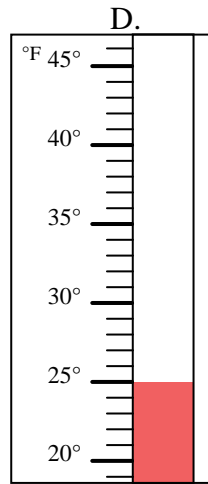
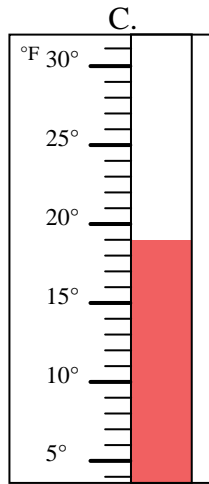
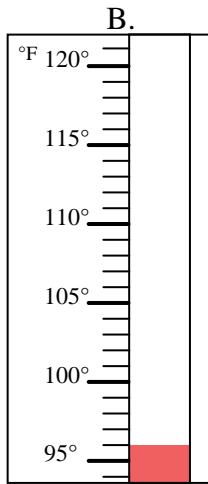
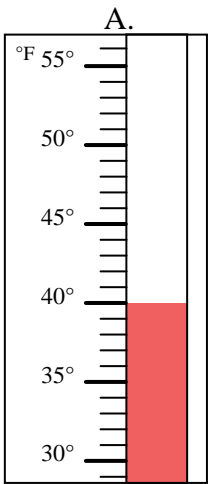


Determine which letter best answers each question.

Answers

- 1) Which thermometer best represents the temperature 57°? _____
- 2) Which thermometer best represents the temperature 52°? _____
- 3) Which thermometer best represents the temperature 96°? _____
- 4) Which thermometer best represents the temperature 25°? _____
- 5) Which thermometer best represents the temperature 42°? _____
- 6) Which thermometer best represents the temperature 19°? _____
- 7) Which thermometer best represents the temperature 93°? _____
- 8) Which thermometer best represents the temperature 30°? _____
- 9) Which thermometer best represents the temperature 40°? _____
- 10) Which thermometer best represents the temperature 98°? _____

1. _____
2. _____
3. _____
4. _____
5. _____
6. _____
7. _____
8. _____
9. _____
10. _____





Determine which letter best answers each question.

- 1) Which thermometer best represents the temperature 57°? E
- 2) Which thermometer best represents the temperature 52°? H
- 3) Which thermometer best represents the temperature 96°? B
- 4) Which thermometer best represents the temperature 25°? D
- 5) Which thermometer best represents the temperature 42°? G
- 6) Which thermometer best represents the temperature 19°? C
- 7) Which thermometer best represents the temperature 93°? I
- 8) Which thermometer best represents the temperature 30°? J
- 9) Which thermometer best represents the temperature 40°? A
- 10) Which thermometer best represents the temperature 98°? F

Answers

1. E
2. H
3. B
4. D
5. G
6. C
7. I
8. J
9. A
10. F

